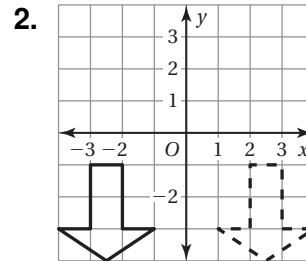
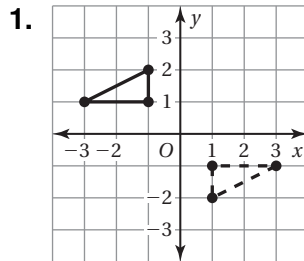


Name _____ Date _____

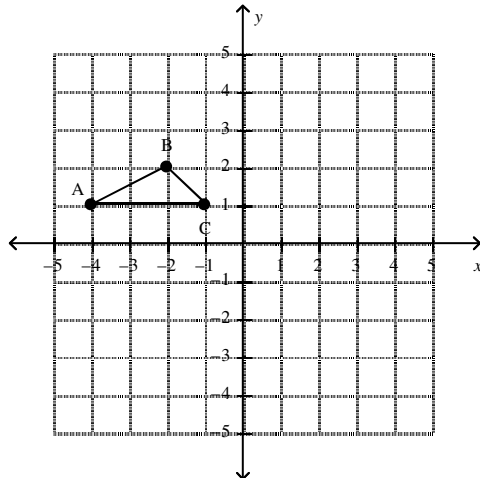
Rotation Practice

Tell whether the dashed figure is a rotation of the solid figure about the origin. If so, give the angle and direction of rotation.



The vertices of a triangle are $A(-4, 1)$, $B(-2, 2)$, and $C(-1, 1)$. Rotate the triangle as described. Find the coordinates of the image.

4. 90° clockwise
counterclockwise



5. 180°

